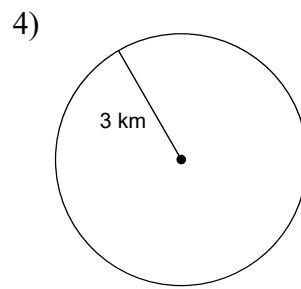
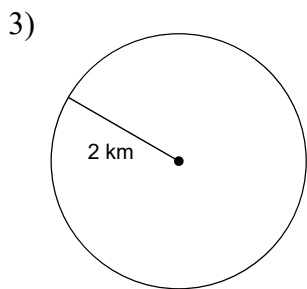
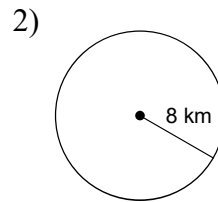
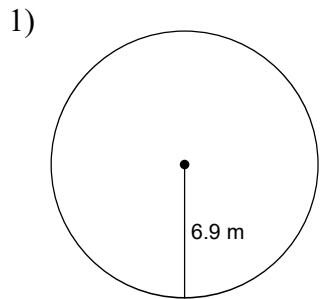
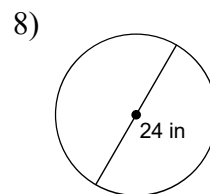
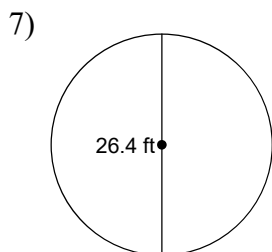
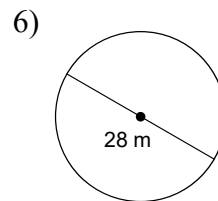
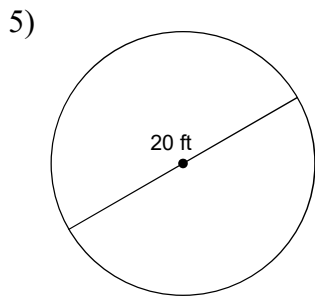


CDL Day 13 Geo

Find the circumference of each circle. Use your calculator's value of π . Round your answer to the nearest tenth.



Find the area of each. Use your calculator's value of π . Round your answer to the nearest tenth.



Find the circumference of each circle.

9) area = 169π km²

10) area = 9π mi²