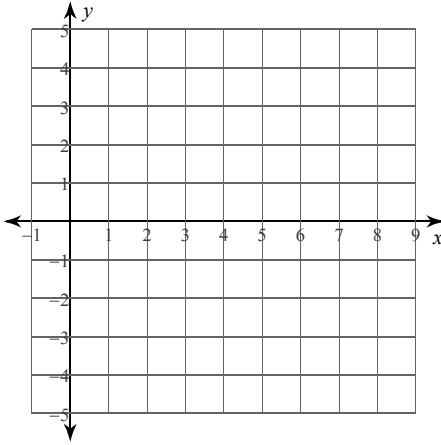


CDL Day 13 Alg

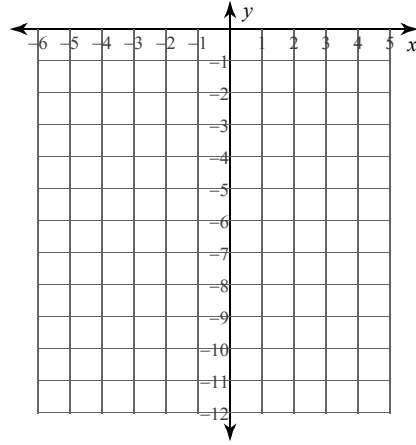
Date _____ Period _____

Sketch the graph of each function.

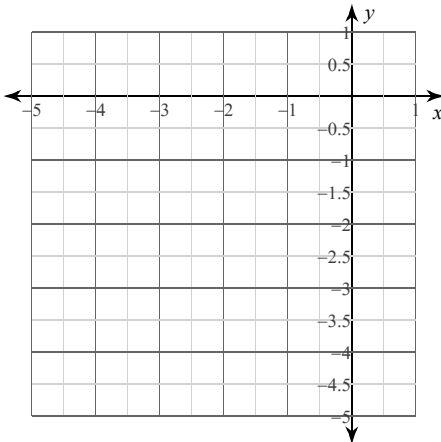
1) $y = 2(x - 3)^2 - 4$



2) $y = -2(x + 4)^2 - 3$



3) $y = x^2 + 2x - 3$



4) $y = x^2 - 2x$

