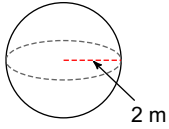


## Covid Distance Learning Day 10

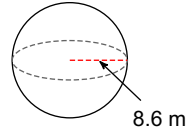
Date \_\_\_\_\_ Period \_\_\_\_\_

Find the surface area of each figure. Round your answers to the nearest hundredth, if necessary. Surface Area =  $4(\pi)r^2$

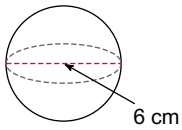
1)



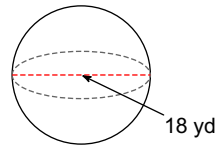
2)



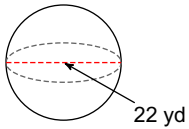
3)



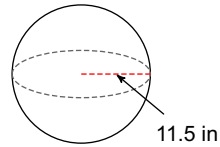
4)



5)



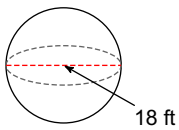
6)



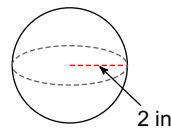
Find the volume of each figure. Round your answers to the nearest hundredth, if necessary.

Volume =  $\frac{4}{3}(\pi)r^3$

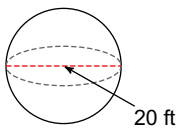
7)



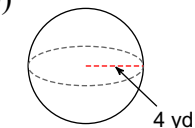
8)



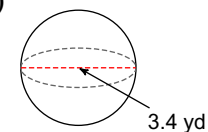
9)



10)



11)



12)

