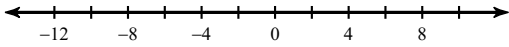


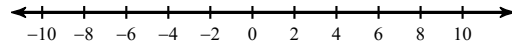
Covid Distance Learning Day 7

Solve each inequality and graph its solution.

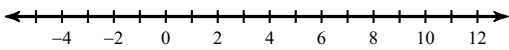
1) $\left| \frac{x}{10} \right| \leq 1$



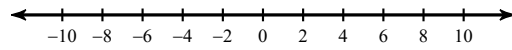
2) $\left| \frac{x}{2} \right| \leq 4$



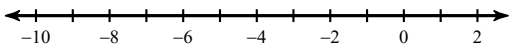
3) $|m - 3| < 7$



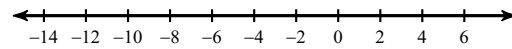
4) $|a + 1| \leq 9$



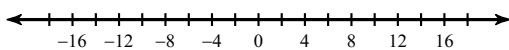
5) $|2n| < 2$



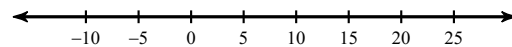
6) $|r + 3| > 7$



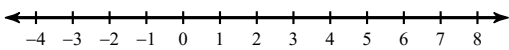
7) $\left| \frac{r}{5} \right| > 3$



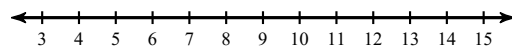
8) $|n - 8| \geq 17$



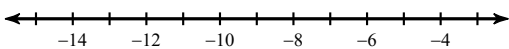
9) $|-1 + r| \leq 1$



10) $|v - 9| \leq 3$



11) $|x + 9| < 3$



12) $|-6x| \leq 6$

